

Relationship between tangent, Secant Side Lengths

<http://www.mathwarehouse.com/geometry/circle/>

Tangent , Secant Side Lengths URL

www.mathwarehouse.com/geometry/circle/tangent-secant-side-length.php

© www.mathwarehouse.com All Rights Reserved

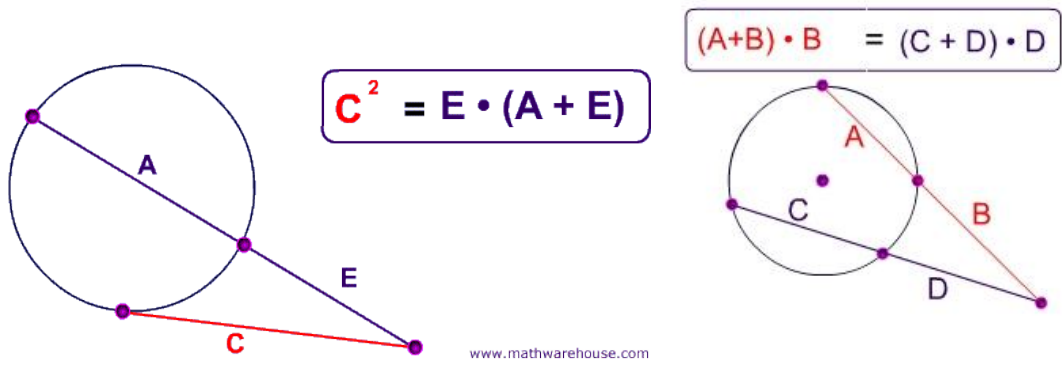
Commercial Use Prohibited

TEACHERS: Feel free to make copies of this worksheet for the sole purpose of use in your own classroom. ENJOY!!! Redistribution in any other form is prohibited.

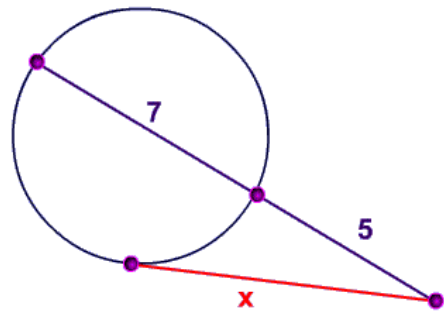
More worksheets and activities available at www.mathwarehouse.com/classroom/worksheets-and-activities.php

Play Math Games at TheMathGames.com

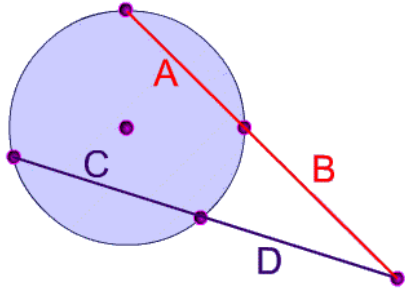
The Formulas



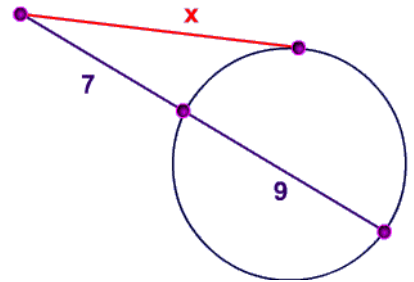
1) What is the value of X below?



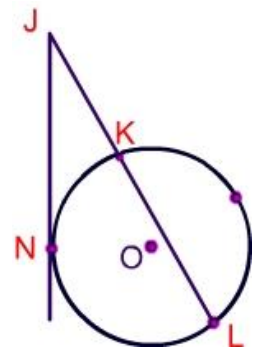
2) In the picture below $B=4$, $C=8$, and $D=5$. What is A ?



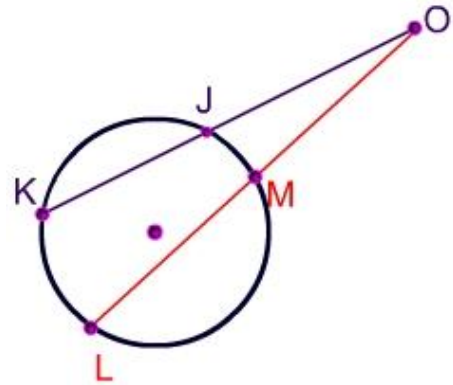
3) What is the value of x in the picture on the right?



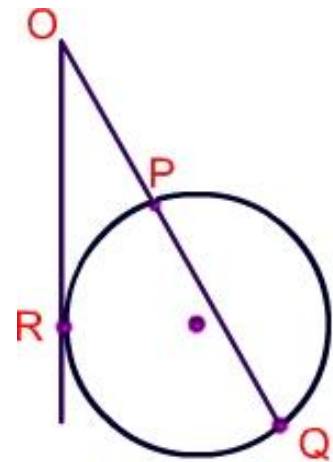
4) $\overline{JN} = 12$ and \overline{KL} is 3 times \overline{JK} . Find the values of \overline{JN} , \overline{KL} and \overline{JK}



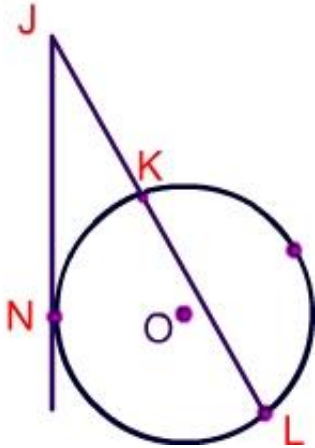
5) What is the value of A if B= 8, C=16, and D = 10?



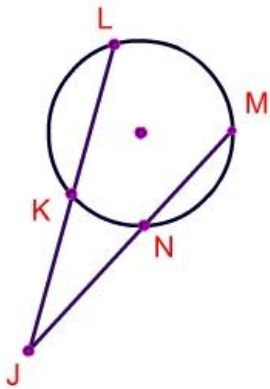
6) $\overline{OR} = 8$, $\overline{PQ} = 12$ find \overline{OQ}



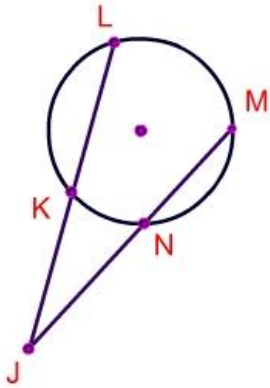
7) $\overline{JN} = 8$, $\overline{JK} = 4$ find \overline{JL}



8) $\overline{JK} = 8$, $\overline{JL} = 25$ find $\overline{JN} = 10$



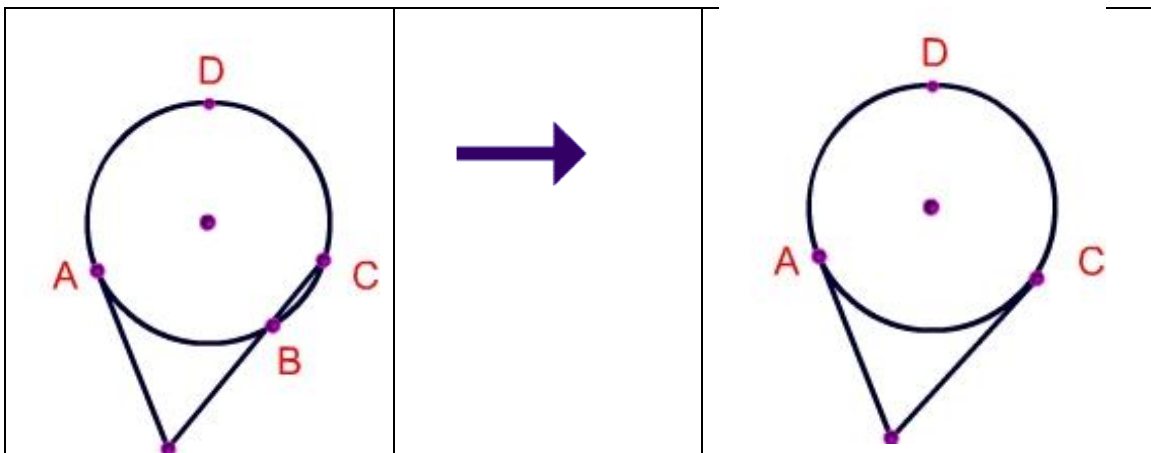
9) $\overline{JN} = 9$, $\overline{JM} = 21$, \overline{JL} is 5 times JK



Think Pair Share

We have learned the formula for a tangent and secant (see the picture on the right). Consider what would happen if point B and Point C are collinear. What do you think might be the relationship between the two line segments?

Explain your reasoning:



© www.mathwarehouse.com All Rights Reserved

Commercial Use Prohibited

TEACHERS: Feel free to make copies of this worksheet for the sole purpose of use in your own classroom. ENJOY!!! Redistribution in any other form is prohibited.

More worksheets and activities available at www.mathwarehouse.com/classroom/worksheets-and-activities.php

Play Math Games at TheMathGames.com