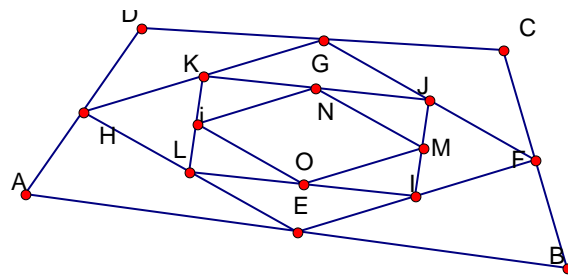
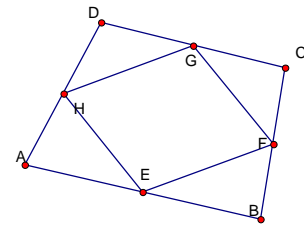


**Overview:** Students will use The Geometer's Sketchpad to construct a quadrilateral, and then students will construct midpoints on each of the sides of the quadrilateral. After students connect these four midpoints they will have to classify the inscribed quadrilateral by making a series of measurements of the inscribed angles, of the sides' lengths and slopes. The inscribed quadrilateral (EFGH in picture) is a parallelogram.




© 2007 [www.mathwarehouse.com](http://www.mathwarehouse.com) All Rights Reserved  
Commercial Use Prohibited

**TEACHERS:** Feel free to make copies of this worksheet for the sole purpose of use in your own classroom. ENJOY!!!

More worksheets and activities available at  
[www.mathwarehouse.com/classroom/worksheets-and-activities.php](http://www.mathwarehouse.com/classroom/worksheets-and-activities.php)

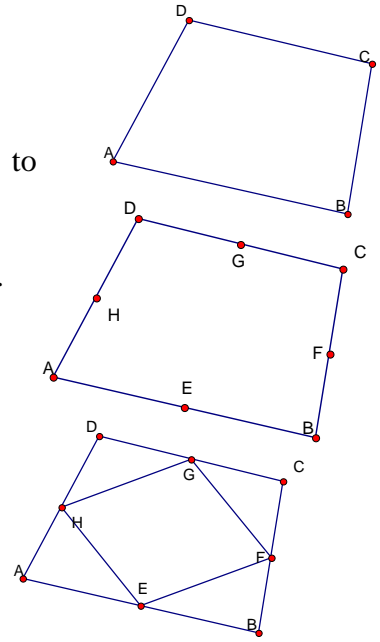
Activity is on next page

**Task #1) Create the Shape**  
**→ Make quadrilateral ABCD**

(no parallel or perpendicular lines, just use the line segment tool  to create a four sided shape ABCD –a plain, old quadrilateral)

→ Select line segment  $\overline{AB}$ , click on “Construct” choose “midpoint”. You should see a midpoint added. Label the point “E”. Do this to all four sides until each side has a midpoint (points F, G and H).  
 Picture →

→ Construct Line segments from E to F, F to G, G to H, and H to E. Picture →



**Task #2) Determine what kind of shape EFGH is by finding the measure of**

1) The following angles

$\angle EFG$ : \_\_\_\_\_       $\angle FGH$ : \_\_\_\_\_  
 $\angle HEF$ : \_\_\_\_\_       $\angle GHE$ : \_\_\_\_\_

2) Length of the sides

$\overline{EF}$  \_\_\_\_\_       $\overline{FG}$  \_\_\_\_\_  
 $\overline{GH}$  \_\_\_\_\_       $\overline{HE}$  \_\_\_\_\_

3) Slope of the sides

$\overline{EF}$  \_\_\_\_\_       $\overline{FG}$  \_\_\_\_\_  
 $\overline{GH}$  \_\_\_\_\_       $\overline{HE}$  \_\_\_\_\_

**Task #3) CLASSIFY EFGH .**

Use your measurements from task #2 and the properties that we have studied to explain your classification.

---



---

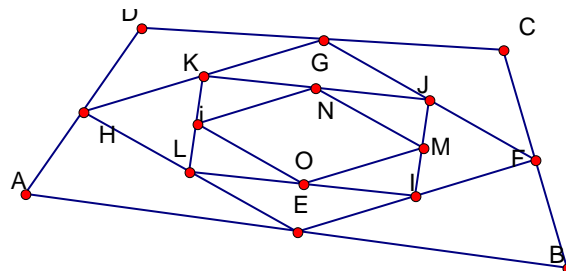


---

**Extend:**

Continue to make quadrilaterals by constructing four midpoints until you have the following picture

Are all of these new inner quadrilaterals the same kind of shape? (i.e. Would each inner shape receive the same classification that you came up with in task #3?)



© 2007 [www.mathwarehouse.com](http://www.mathwarehouse.com) All Rights Reserved  
Commercial Use Prohibited

**TEACHERS:** Feel free to make copies of this worksheet for the sole purpose of use in your own classroom. ENJOY!!!

Without prior written permission, redistribution in any other form is prohibited.

More worksheets and activities available at  
[www.mathwarehouse.com/classroom/worksheets-and-activities.php](http://www.mathwarehouse.com/classroom/worksheets-and-activities.php)